

Lesweek 7

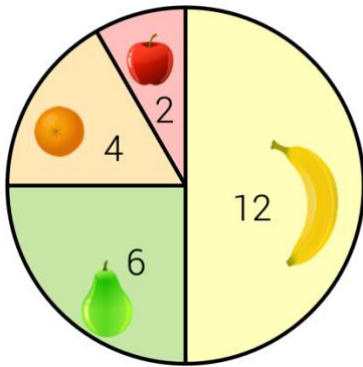
Je leert: werken met cirkeldiagrammen

1 Cirkeldiagram

 Kijk de video

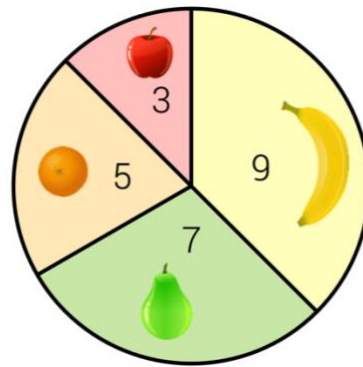
1A. Schrijf op hoeveel er van alles is. En hoeveel fruit is er in totaal?

fruit
samen ...



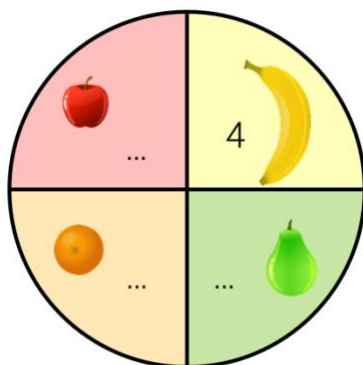
banaan: ...
peer: ...
mandarijn: ...
appel: ...

fruit
samen ...



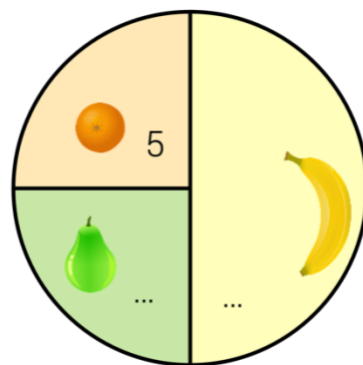
banaan: ...
peer: ...
mandarijn: ...
appel: ...

fruit
samen ...




banaan: ...
peer: ...
mandarijn: ...
appel: ...





fruit
samen ...




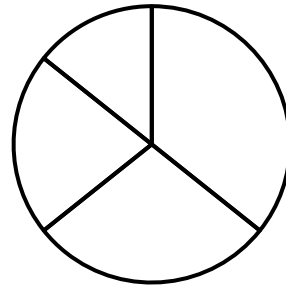
banaan: ...
peer: ...
mandarijn: ...





1B. Tel de fruitsoorten en schrijf in de tabel. Maak daarna het cirkeldiagram af.



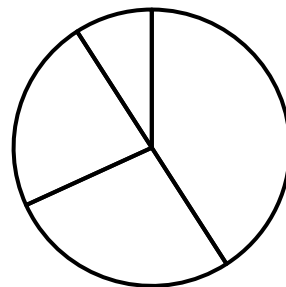
			
...

fruit
samen ...



			
...

fruit
samen ...

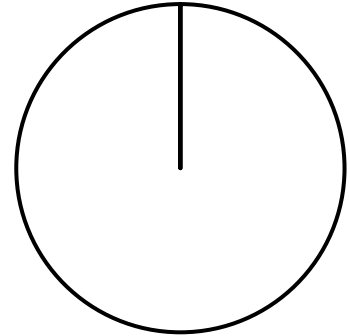


1C. Teken zelf drie fruitsoorten. Vul de tabel in. En maak er een cirkeldiagram bij.

Teken hier fruit

...

fruit
samen ...



Teken hier fruit

...

fruit
samen ...

